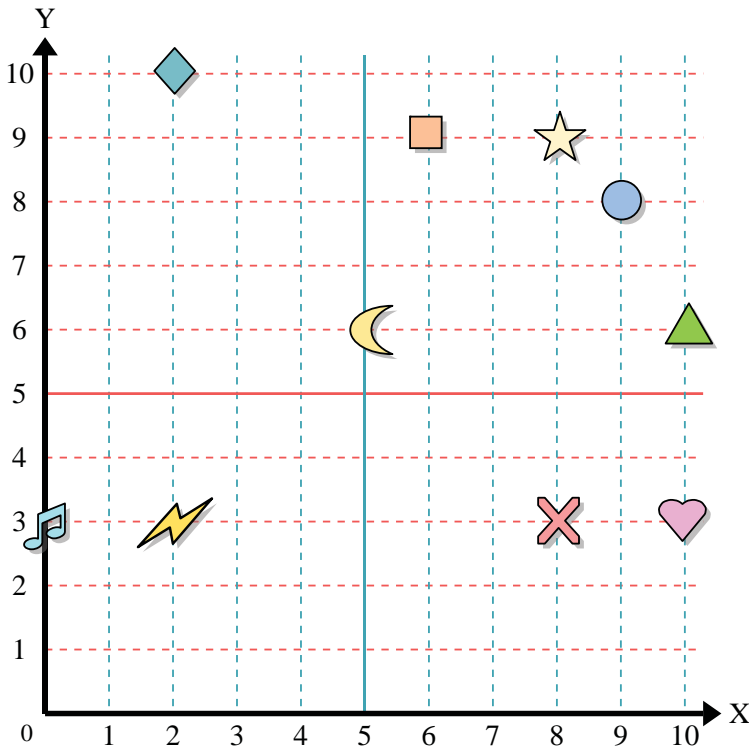




Use the grid below to determine the coordinates where each figure is located.



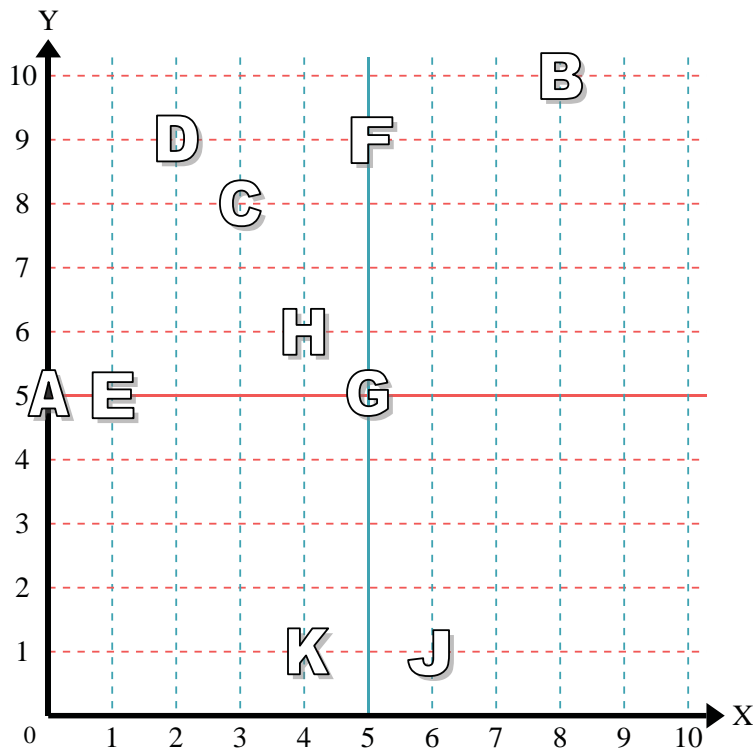
- 1) Star _____
- 2) Lightning _____
- 3) Circle _____
- 4) Heart _____
- 5) Cross _____
- 6) Triangle _____
- 7) Moon _____
- 8) Square _____
- 9) Diamond _____
- 10) Music Note _____

Answers

- 1. _____
- 2. _____
- 3. _____
- 4. _____
- 5. _____
- 6. _____
- 7. _____
- 8. _____
- 9. _____
- 10. _____
- 11. _____
- 12. _____
- 13. _____
- 14. _____
- 15. _____
- 16. _____
- 17. _____
- 18. _____
- 19. _____
- 20. _____

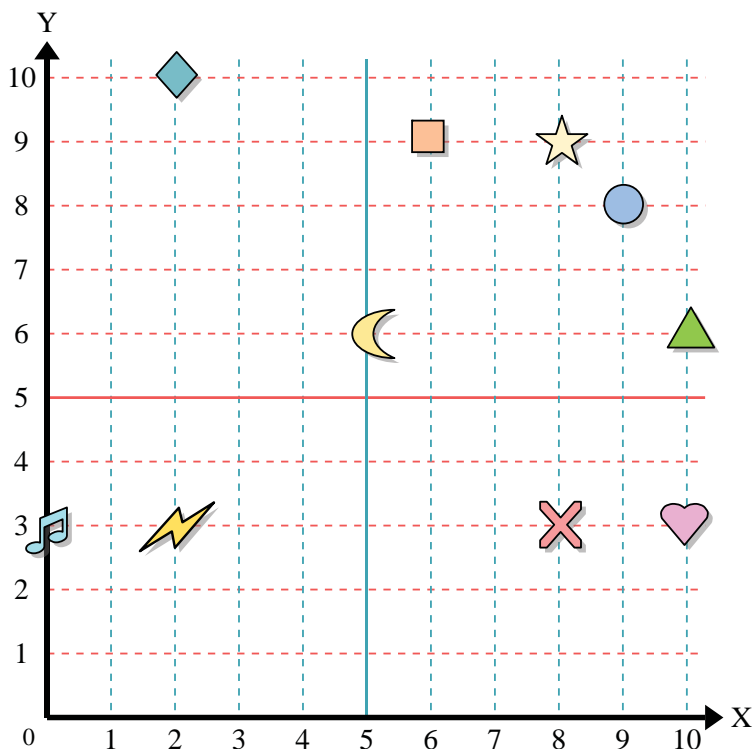
Determine which letter is at each coordinate using the grid below.

- 11) (3, 8) _____
- 12) (5, 5) _____
- 13) (0, 5) _____
- 14) (8, 10) _____
- 15) (2, 9) _____
- 16) (5, 9) _____
- 17) (6, 1) _____
- 18) (4, 6) _____
- 19) (1, 5) _____
- 20) (4, 1) _____





Use the grid below to determine the coordinates where each figure is located.



- 1) Star (8 , 9)
- 2) Lightning (2 , 3)
- 3) Circle (9 , 8)
- 4) Heart (10 , 3)
- 5) Cross (8 , 3)
- 6) Triangle (10 , 6)
- 7) Moon (5 , 6)
- 8) Square (6 , 9)
- 9) Diamond (2 , 10)
- 10) Music Note (0 , 3)

Answers

- 1. (8 , 9)
- 2. (2 , 3)
- 3. (9 , 8)
- 4. (10 , 3)
- 5. (8 , 3)
- 6. (10 , 6)
- 7. (5 , 6)
- 8. (6 , 9)
- 9. (2 , 10)
- 10. (0 , 3)
- 11. C
- 12. G
- 13. A
- 14. B
- 15. D
- 16. F
- 17. J
- 18. H
- 19. E
- 20. K

Determine which letter is at each coordinate using the grid below.

- 11) (3 , 8) C
- 12) (5 , 5) G
- 13) (0 , 5) A
- 14) (8 , 10) B
- 15) (2 , 9) D
- 16) (5 , 9) F
- 17) (6 , 1) J
- 18) (4 , 6) H
- 19) (1 , 5) E
- 20) (4 , 1) K

